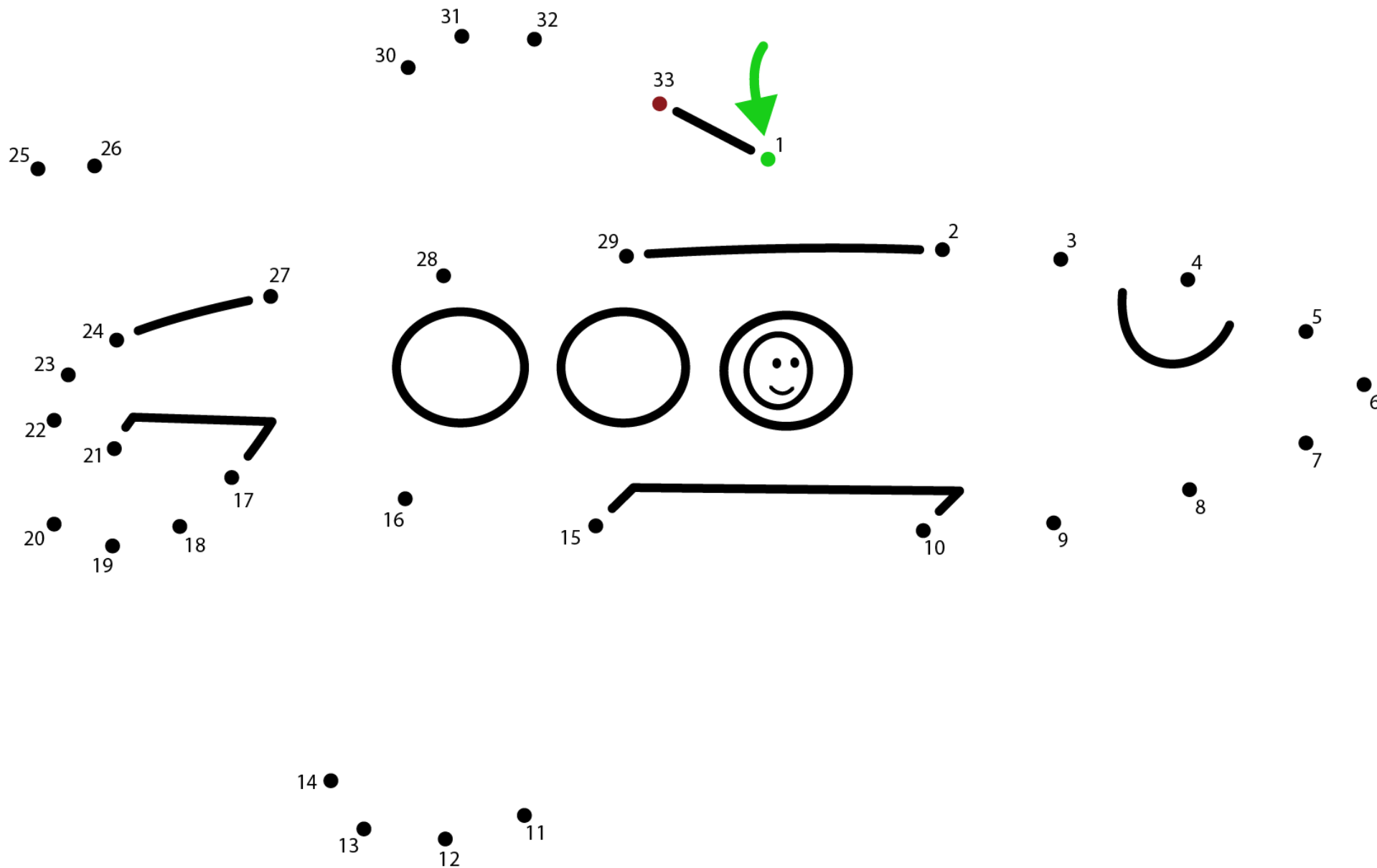


Dot-to-Dot

Name: _____

Count by 1s. What is this? _____



Patchwork Math

Name: _____

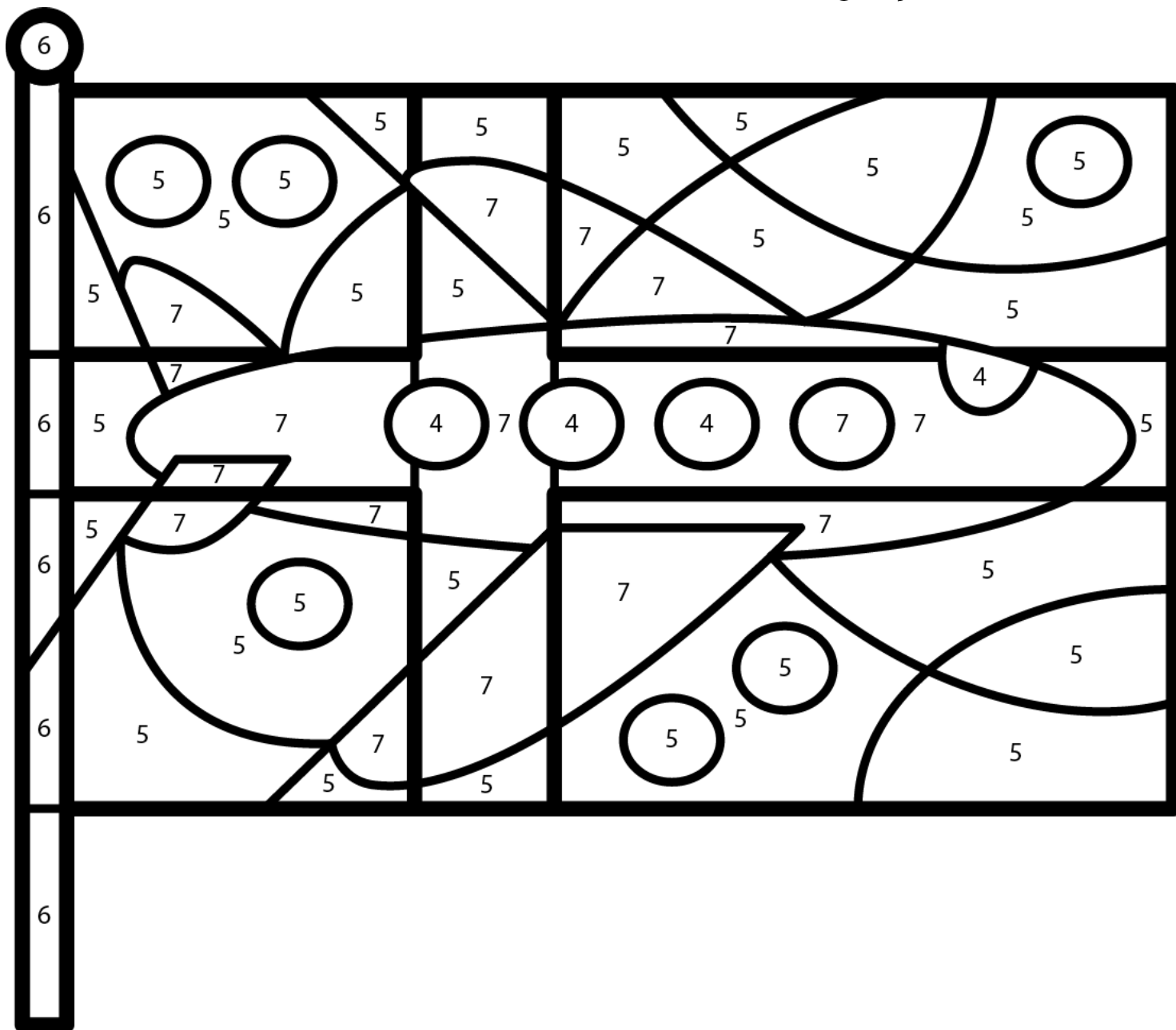
Color the picture of the flag of Sweden, using the colors beside the numbers below.

4 = no color

5 = purple

6 = blue

7 = gray



What hidden picture did you find?

plane

law

Which Is Greater?

Name: _____

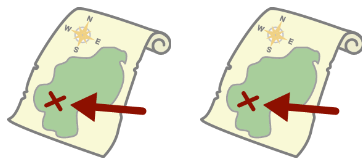
- Count the items in each row. Place the number in the box.
- Place a checkmark in the small box next to the number that is greater.



| Number | Which is greater? |
|----------------------|--------------------------|
| <input type="text"/> | <input type="checkbox"/> |




| | |
|----------------------|--------------------------|
| <input type="text"/> | <input type="checkbox"/> |
|----------------------|--------------------------|




| | |
|----------------------|--------------------------|
| <input type="text"/> | <input type="checkbox"/> |
|----------------------|--------------------------|



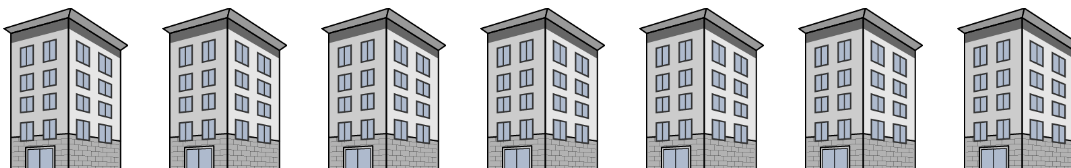
| | |
|----------------------|--------------------------|
| <input type="text"/> | <input type="checkbox"/> |
|----------------------|--------------------------|



| | |
|----------------------|--------------------------|
| <input type="text"/> | <input type="checkbox"/> |
|----------------------|--------------------------|



| | |
|----------------------|--------------------------|
| <input type="text"/> | <input type="checkbox"/> |
|----------------------|--------------------------|



| | |
|----------------------|--------------------------|
| <input type="text"/> | <input type="checkbox"/> |
|----------------------|--------------------------|



| | |
|----------------------|--------------------------|
| <input type="text"/> | <input type="checkbox"/> |
|----------------------|--------------------------|

Which Is Less?

Name: _____

1. Count the items in each row. Place the number in the box.
2. Place a checkmark in the small box next to the number that is less.



Number

Which is less?

☐


☐


☐


☐


☐


☐


☐


☐